

Numeracy 123 Problems-3



Name _____
Date started _____



1 Addition to 10	2 Addition to 10	3 Addition to 10	4 Addition to 10	5 Addition to 10	6 Addition to 10
7 Addition to 10	8 Addition to 10	9 Addition to 10	10 Subtraction from 10	11 Subtraction from 10	12 Subtraction from 10
13 Subtraction from 10	14 Subtraction from 10	15 Subtraction from 10	16 Subtraction from 10	17 Subtraction from 10	18 Subtraction from 10
19 Groupings within 10	20 Groupings within 10	21 Groupings within 10	22 Groupings within 10	23 Groupings within 10	24 Groupings within 10
25 Addition to 20	26 Addition to 20	27 Addition to 20	28 Addition to 20	29 Addition to 20	30 Addition to 20
31 Addition to 20	32 Addition to 20	33 Addition to 20	34 Subtraction from 20	35 Subtraction from 20	36 Subtraction from 20
37 Subtraction from 20	38 Subtraction from 20	39 Subtraction from 20	40 Subtraction from 20	41 Subtraction from 20	42 Subtraction from 20
43 Groupings within 20	44 Groupings within 20	45 Groupings within 20	46 Groupings within 20	47 Groupings within 20	48 Groupings within 20
49 Addition with 10	50 Addition with 10	51 Addition with 10	52 Addition with 10	53 Addition with 10	54 Addition with 10
55 Halves of sets	56 Halves of sets	57 Halves of sets	58 Halves of sets	59 Halves of sets	60 Halves of sets












I am learning to add up to 10 with materials.
I can use my fingers, a number strip, a tens frame, counters...

Numeracy 123

Problems 2-Addition to 10.

Read each story problem and show how you worked out the answer in the box beside it.

1 	I had 5 cats and then I got 2 more. How many cats did I have altogether?	
2 	There were 4 big dinosaurs and 3 small dinosaurs. How many were there altogether?	
3 	7 boys were playing ball. 3 more boys came to play. How many boys were there?	
4 	There were 2 birds in the nest and 5 more hopped in. How many birds were there in the nest altogether?	
5 	There was 1 dog in the pet shop. 3 more came in. How many dogs were there altogether?	
6 	There were 3 red flowers and 3 yellow flowers in the garden. How many flowers were there?	
7 	4 big giraffes and 6 small giraffes lived in the zoo. How many giraffes were there altogether?	
8 	Katie had 6 dolls. She got 2 more for her birthday. How many dolls did she have altogether?	
9 	There were 6 trucks at the garage. 1 more came in. How many trucks were there?	
10 	9 frogs sat in the pond. 1 more hopped in. How many frogs were there in the pond?	







I am learning to add and subtract up to 20 with materials.
I can use my fingers, a number strip, a tens frame, counters...

Numeracy 123

Problems 2-1

Read each story problem and show how you worked out the answer in the box beside it.

1  1	I had 5 cats and then I got 2 more. How many cats did I have altogether?	
2  13	5 pigs were in the mud. 2 ran away. How many pigs were left?	
3  2	There were 4 big dinosaurs and 3 small dinosaurs. How many were there altogether?	
4  18	6 spiders were on the web. 2 ran away. How many spiders were left?	
5  3	2 boys were playing ball. 4 more boys came to play. How many boys were there?	
6  34	8 trees grew in the garden. 5 fell over. How many trees were left?	
7  38	6 snails sat on the leaf then 1 of them slid away. How many snails were left on the leaf?	
8  19	There were 4 elephants in the mud. 1 went away. How many elephants were left?	
9  5	There was 1 dog in the pet shop. 3 more came in. How many dogs were there altogether?	
10  25	5 green cars and 4 red cars were in a race. How many cars were there altogether?	





I am learning to add and subtract up to 20 by imaging.
That means I can add and subtract in my head.

Numeracy 123

Problems 3-10

Read each story problem and show how you worked out the answer in the box beside it.

1  26	13 birds sat in the nest. 4 more arrived. How many birds were there altogether?	
2  40	The farmer had 16 cows. He sold 5. How many cows did he have left?	
3  11	There were 7 chocolates in the box. I ate 5. How many did I have left?	
4  35	15 children were flying kites in the park. 4 of them had to go home. How many children were left?	
5  2	There were 3 children on the bus. 6 more got on. How many children were there on the bus	
6  13	Mum made 6 hamburgers. The children ate 2. How many were left?	
7  5	Allie is 2 years old and Max is 5. How much older is Max?	
8  29	I had 14 fish in my bowl but I wanted to have 18 altogether. How many more fish did I need to buy?	
9  8	Sam had 1 toy car and 4 toy trucks. How many toys did he have altogether?	
10  37	18 snakes lived in the zoo. 5 slid away. How many were left?	