



Numeracy 123 Problems-4



Name

Date started

1 Addition to 100	2 Addition to 100	3 Addition to 100	4 Addition to 100	5 Addition to 100	6 Addition to 100
7 Addition to 100	8 Addition to 100	9 Addition to 100	10 Subtraction from 100	11 Subtraction from 100	12 Subtraction from 100
13 Subtraction from 100	14 Subtraction from 100	15 Subtraction from 100	16 Subtraction from 100	17 Subtraction from 100	18 Subtraction from 100
19 Adding tens	20 Adding tens	21 Adding tens	22 Adding tens	23 Adding tens	24 Adding tens
25 Subtracting tens	26 Subtracting tens	27 Subtracting tens	28 Subtracting tens	29 Subtracting tens	30 Subtracting tens
31 Adding two digit numbers	32 Adding two digit numbers	33 Adding two digit numbers	34 Adding two digit numbers	35 Adding two digit numbers	36 Adding two digit numbers
37 Adding two digit numbers	38 Adding two digit numbers	39 Adding two digit numbers	40 Subtracting two digit numbers	41 Subtracting two digit numbers	42 Subtracting two digit numbers
43 Subtracting two digit numbers	44 Subtracting two digit numbers	45 Subtracting two digit numbers	46 Subtracting two digit numbers	47 Subtracting two digit numbers	48 Subtracting two digit numbers
49 Multiply by skip counting in 2's	50 Multiply by skip counting in 2's	51 Multiply by skip counting in 2's	52 Multiply by skip counting in 5's	53 Multiply by skip counting in 5's	54 Multiply by skip counting in 5's
55 Multiply by skip counting in 10's	56 Multiply by skip counting in 10's	57 Multiply by skip counting in 10's	58 Fractions of sets	59 Fractions of sets	60 Fractions of sets



I am learning to: add and subtract up to 100 by counting on or back from the largest number * add and subtract tens and ones * multiply by skip counting in 2's, 5's and 10's * find fractions of sets.

Numeracy 123

Problems 4-Adding tens

Show how you worked out each answer in the space underneath.

1	I had 30 cents in my piggy bank and I found another 20 cents. How much did I have altogether?
2	Amy had 20 coloured pencils and Charlotte had 40. How many did the girls have altogether?
3	Jane counted the flowers in her garden. She had 40 blue flowers and 50 orange flowers. How many flowers did she have altogether?
4	It was Ruth's birthday. She had 50 yellow balloons and 40 green balloons. How many balloons did she have altogether?
5	There were 20 counters in a box. The children found 50 more in a tray. How many counters did they have altogether?
6	Sally had 40 cents in her bag but needed 80 cents for the bus fare home. How much more money did she need?
7	I had 10 cents in my piggy bank and I found another 10 cents. How much did I have altogether?
8	Amy had 50 coloured pencils and Charlotte had 10. How many did the girls have altogether?
9	Jane counted the flowers in her garden. She had 10 blue flowers and 30 orange flowers. How many flowers did she have altogether?
10	It was Ruth's birthday. She had 20 yellow balloons and 30 green balloons. How many balloons did she have altogether?













I am learning to: add and subtract up to 100 by counting on or back from the largest number * add and subtract tens and ones * multiply by skip counting in 2's, 5's and 10's * find fractions of sets.

Numeracy 123

Problems 4-2

Show how you worked out each answer in the space underneath.

1 15 	There were 78 children in the school hall. The school bus came and collected 9 of them. How many were left in the hall?
2 2 	Simon had 72 stickers in his book. The next day he got 5 more. How many stickers did he have altogether?
3 26 	Karen took her sticker book to school. She had 80 stickers but 40 flew away. How many stickers did she have left?
4 14 	There were 27 bananas in the box. 6 of them were rotten. How many of them were good to eat?
5 38 	The pet shop had 24 mice in a cage. The cage could hold 45 mice. How many more could the owner put in it?
6 6 	There were 5 ducks on the pond and 38 more flew in. How many ducks were there on the pond?
7 20 	Amy had 20 coloured pencils and Charlotte had 40. How many did the girls have altogether?
8 32 	16 bugs were sitting on one leaf and 13 on another. How many bugs were there altogether?
9 8 	The class had 25 soccer balls but needed 29. How many more soccer balls did they have to get?
10 18 	Room 2 had 72 reading books at the start of the term, but only 67 at the end. How many books had they lost?



I am learning to: add and subtract up to 100 by counting on or back from the largest number * add and subtract tens and ones * multiply by skip counting in 2's, 5's and 10's * find fractions of sets.

Numeracy 123

Problems 4-21

Show how you worked out each answer in the space underneath.

1 48		Jerry had 35 jelly beans in a bag. After his friends had eaten some he had 24 left. How many had his friends eaten?
2 19		I had 50 cents in my piggy bank and I found another 20 cents. How much did I have altogether?
3 42		There were 38 strawberries in the box. 15 boys ate one each. How many strawberries were left in the box?
4 50		In the garden we have 9 lemon trees with 2 lemons on each tree. How many lemons do we have altogether?
5 25		There were 60 books in the library. 40 had been taken out. How many books were left in the library?
6 55		Mum bought 6 packs of buns. Each pack had 10 buns in it. How many buns did Mum buy altogether?
7 46		Charlie took a box containing 38 snails to school. After lunch the box only contained 24. How many snails had crawled away?
8 57		Paint brushes come in packs of 10. We need 90 brushes for our art project. How many packs do we need to buy?
9 37		Jamie has 74 cans of drink but has 98 friends coming to her party. So everybody can have one each, how many more cans are needed?
10 47		Charlotte picked 58 flowers from the meadow. After giving some to her friends she had 36 left. How many did she give away?